

SUMMER VACATIONS HOLIDAY HOMEWORK (2024-25)

CLASS III

SUBJECT : ENGLISH

1. Find out 20 difficult words from Chapter-2 'I Don't Want a Haircut' and Chapter-3 'Anansi and Wisdom'. Write their synonym and antonym on A-4 size sheets.

2. On an A-3 size sheet, make a COLLAGE according to your Roll No.

Roll No. 1-25 Famous food dishes of Andaman and Nicobar Island

Roll No. 26 – 45 Festivals / Outfits of Andaman and Nicobar Island

3. Read English storybooks/newspapers/comic books daily.



4. Write total 30 pages of handwriting from any storybook/newspaper/comic book . Maintain a separate notebook for it.

5. Make a poster (A-3 size sheet) /wall hanging on 'TREAT OF GOOD MANNERS'



OR

Read a book/ short story of your choice and design a PIZZA BOOK BITE. Write the title of the story on the first page. On each slice of pizza write 2-3 lines describing the short story. Paste/Draw pictures related to it.



**SUBJECT : HINDI**

1. 15 सुलेख लिखे। लेखनी स्पष्ट एवं सुंदर होनी चाहिए।
2. अंडमान और निकोबार पर एक परियोजना कार्य तैयार करे जिसका विषय है- नृत्य कला, आभूषण, पोशाक विषय पर दो पेज तैयार करो
3. 'विभा' किताब में से पाठ-3 और पाठ-प पढ़ो और शब्द-अर्थ, कठिन शब्द याद करो।
4. कक्षा में करवाया गया कार्य पूरा करें और समयावधि 1 का काम याद करे।
5. ए-३ साईज शीट पर भाषा और उनकी लिपियों का उदाहरण सहित सुंदर चार्ट बनाइए।
6. मैगजीन के लिए अपनी इच्छानुसार एक आर्टिकल तैयार करे।
7. नीचे दिए हुए शब्दों से वाक्य बनाओ-  
स्कूल ,सुंदर, सफेद ,मीठा ,अच्छा, कमजोर, आकाश ,नेत्र धरती , गाय

**SUBJECT : PUNJABI**

1. PRACTICE **ੳ-ੲ** 5 TIMES EVERY DAY.
2. MAKE A CHART OF **ੳ-ੲ** WITH PICTURES.

**SUBJECT : MATHEMATICS**

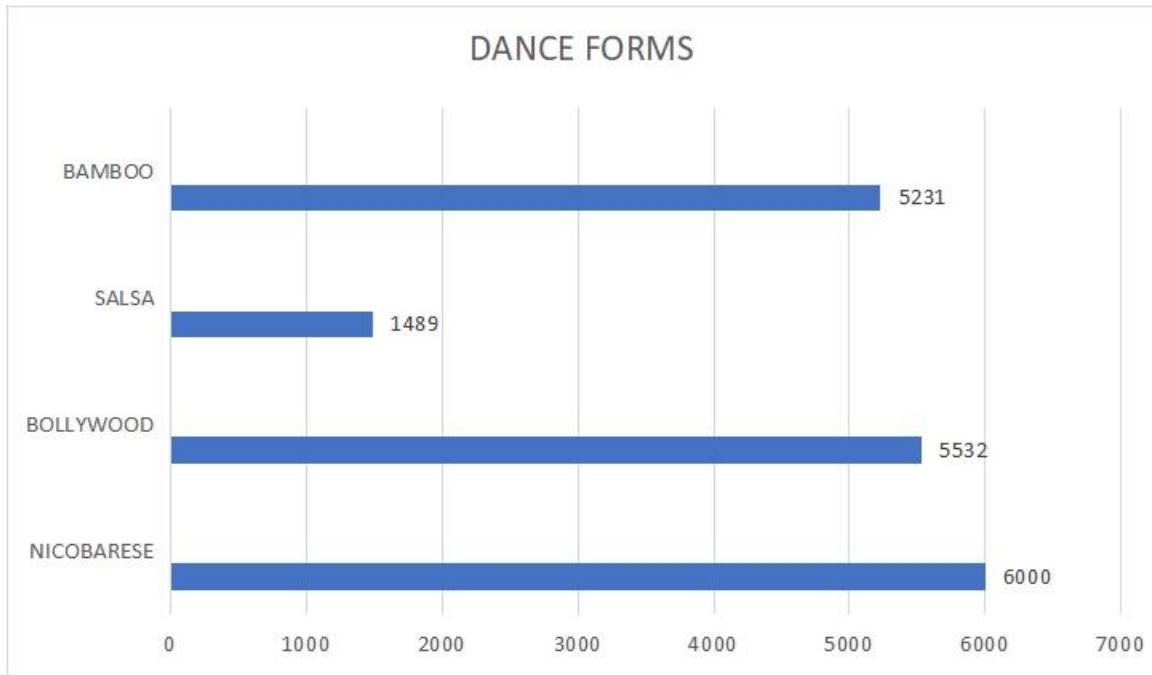
General instructions:

1. Project Work to be done on A4 size coloured one side ruled sheets.
2. Assignment to be done neatly on A4 size Ruled sheets.
3. All tasks to be clubbed & submit in same file or folder.

**TASK 1:** Write tables from (2 to 12) five times

**TASK 2:** Project Work

- a) The following Bar graph shows the number of people who likes various dance forms in Andaman and Nicobar Islands. Read the given data and answer the following questions:



1. Which Dance form is most popular?
2. Write the number name of people who likes Bollywood dance.
3. What is the difference between the number of people who likes Bollywood and people who likes Salsa dance form?
4. Find the predecessor of number of people who like Nicobarese dance form.
5. Arrange the number of people in descending order.
6. Find the difference between the place value and face value of 5 in number of people who like Bamboo dance.

b) Design a jewellery that the people wear in Andaman and Nicobar islands using mathematical shapes.

### TASK 3: Assignment

#### Ch-1(Numbers Up-to Ten Thousands)

Q1. Write the number names for following:

a) 345 : \_\_\_\_\_

b) 9091 : \_\_\_\_\_

c) 8157 : \_\_\_\_\_

d) 8789 : \_\_\_\_\_

**Q2. Compare :**

a) 854 \_\_\_\_ 894

c) 8457 \_\_\_\_ 8475

b) 5474 \_\_\_\_ 5655

d) 5478 \_\_\_\_ 524

**Q3. Find the place value of 6 in following numbers :**

a) 84604 \_\_\_\_\_

b) 86475 : \_\_\_\_\_

c) 62478 \_\_\_\_\_

d) 51654: \_\_\_\_\_

**Q4. Find the sum of place value and face value of 5 in 45667.**

**Q5. Find the difference of place value and face value of 7 in 48741.**

**Q6. Find the sum of place value of 8 and face value of 7 in 58745.**

**Q7. Find the difference between the place value of 6 and place value of 7 in 74565.**

---

**Q8. Mr. Sharma purchased 84578 socks from Delhi, 54745 from Amritsar and 12457 from Mumbai for his shop.**

a) How many total socks he bought?

b) Write the number name for the socks he bought from Amritsar.

c) Place value of 2 from the number of socks he bought from Mumbai.

---

**Q9. Write the place value of each digit in 56479.**

**Q10. Write a 5-digit number with 8 at it's thousands place.**

---

---

**Ch-2(More about Numbers Up-to Ten Thousands)**

**Q1. Arrange the following in ascending order.**

**34523, 90876, 45324, 97656, 98712**

---

**Q2. Arrange the following in Descending order.**

56434, 98765, 90876, 12345, 54323

---

**Q3. Form the greatest 5-digit number using 2,0,1,4,5**

---

**Q4. Form the smallest 6-digit number using 5,0,6,4,5,8**

---

**Q5. Find the successor of following numbers:**

a) 54710 : \_\_\_\_\_

b) 14782 : \_\_\_\_\_

c) 54784 : \_\_\_\_\_

**Q6. Find the predecessor of the following numbers :**

a) 54123: \_\_\_\_\_

b) 12789 : \_\_\_\_\_

c) 52000 : \_\_\_\_\_

**Q7. Which is greater : smallest 4-digit number or greatest 3-digit number ?**

---

---

---

---

**Q8. Ridhi went to a market to buy herself new clothes: She bought a jeans for rupees 5478 and a top for rupees 5214.**

a) Which of the above is more expensive?

\_\_\_\_\_

b) What is the difference between the cost of two?

\_\_\_\_\_  
\_\_\_\_\_

**Q9. Find the predecessor of smallest 5-digit number. Is this the greatest 4-digit number ?**

---

---

---

---

**Q10. Find the successor of greatest 3-digit number. Is this the smallest 4-digit number?**

---

---

---

---

**Ch-3 (Roman Numerals)**

**Q1. Circle the meaningless:**

**XXXX      XXIV      WXXIV      XXA      XIIV      VVIII**  
**IIV      XLVI      LXV      CV      VIII      IXIX**

**Q2. Arrange the following in ascending order:**

**XXII      IV      VIII      XXXIV      XXVII**

**Q3. Arrange the following in descending order:**

**XIX      VIII      XV      XXVII      XLV**

**Q4. Write the following in Roman Numerals :**

- a) 51 : \_\_\_\_\_
- b) 45 : \_\_\_\_\_
- c) 36 : \_\_\_\_\_
- d) 24 : \_\_\_\_\_

**Q5. There were XXIX pink balls, XIX green balls and XX white balls in a box.**

**Answer the following questions in Roman Numerals:**

- a) **What is the total of pink balls and white balls?**

---

---

b) What is the difference between pink and green balls?

---

---

Q6. Write the following in Hindu-Arabic numerals:

a) XXIX : \_\_\_\_\_

b) XLVIII : \_\_\_\_\_

c) XLIX : \_\_\_\_\_

d) XXXVI : \_\_\_\_\_

Q7. There are \_\_\_\_\_ days in a week, \_\_\_\_\_ months in an year and \_\_\_\_\_ days in an year.

Q8. Analogy :

a) 25 : XXVI :: 44 : \_\_\_\_\_

b) 14 : XXVIII : 12 : \_\_\_\_\_

c) 30 : XXIX :: 44 : \_\_\_\_\_

d) 50 : L :: 45 : \_\_\_\_\_

Q9. CIRCLE THE ODD ONE OUT :

a) XXII      IV      XXXVII      VIII

b) XX      XXX      XL      XLV

Q10. SOLVE : XXII + XXIX = \_\_\_\_\_

---

---

**SUBJECT : SCIENCE**

Q1. Art integrated project -What are the major animals of Andaman and Nicobar island. Paste pictures in scrap file and write few lines on them.

Q2. Learn and revise chapter 1 and chapter 2.

**Q3. Complete the worksheet given below.**

**A) Write two examples for each of the following :**

- a) Carnivores \_\_\_\_\_
- b) Herbivores \_\_\_\_\_
- c) Omnivores \_\_\_\_\_
- d) Gnawers \_\_\_\_\_
- e) Pet animals \_\_\_\_\_
- f) Domestic animals \_\_\_\_\_

**B) Which two safety rules that you should follow :**

- a) On the road
- b) At home
- c) While playing

**C) Unscramble the words given in the bracket and fill in the blanks.**

- a) Help if you see any \_\_\_\_\_ (jinrued) person.
- b) Follow the \_\_\_\_\_ (surle) of the game.
- c) Red light says \_\_\_\_\_ (tops) and yellow light says \_\_\_\_\_ (aitw).
- d) Never play with \_\_\_\_\_ (hsarp) things.
- e) Never \_\_\_\_\_ (umjp) on the desks in the class.

**D) Match the following :**

- |                    |                             |
|--------------------|-----------------------------|
| a) Zebra crossing  | I) Go                       |
| b) Cut on skin     | ii) put the finger in water |
| c) Burnt on finger | iii) apply a bandage        |
| d) Green light     | iv) cross the road          |

### **SUBJECT : SOCIAL SCIENCE**

**1. ROLL NO. 1-15**

**HOME SWEET HOME**

**A house is our HOME SWEET HOME. Make a model on different types of houses- Kutcha/pucca house. Choose any one. Take the things easily available at home to give a perfect finish to your model. Here are the hints with the picture and the video link- [https://www.youtube.com/watch?v=3nBnE\\_th7jl](https://www.youtube.com/watch?v=3nBnE_th7jl)**

**2. Roll no 16-30**

**Make the model of the 3 means of transport with the help of waste materials like cardboard, boxes, etc.**



**3.Roll no 31- 46**

**Draw on a chart paper**

- a) Indian National Emblem**
- b) Indian National Flag**
- c) Indian National Flower**
- d) Indian National Animal**
- e) Indian National bird**
- f) Indian national anthem**

**\* Learn and revise all the chapters done till now.**

**\* Read chapter number 4**

**\* Solve mock test paper.**

**\*Art integrated project \***

**There are several types of dance forms, famous in Andaman and Nicobar Island . on A4 size sheet, explain any of the famous tribal dance of Andaman and Nicobar Island. Paste pictures also.**

**SUBJECT : G.K.**

**Read the newspaper daily and write any two current affairs daily in a notebook.**

**SUBJECT : DIVINITY**

**Draw khanda and write its importance on A 4 Size Sheet.**

**SUBJECT: ART**

**a) Topics to be drawn in sketch book:**

- 1. Grow more trees**
- 2. Save water**
- 3. Beach side drawing**

**b) My art world – do page no. – 11,12,22,27,28**

**c) Project:**

- 1. Make a pencil stand and decorate it with sea shells ( R.no. – 1-25)**
- 2. Decorate a plot with sea shell ( R.no.-26 onwards)**

## **SUBJECT : COMPUTER**

**Do the following questions in computer notebook**

- 1. Write 5 output devices**
- 2. Write 5 input devices.**
- 3. Write 5 hardware devices.**
- 4. Write 5 storage devices.**
- 5. Write 5 application software .**

**Project work**

**Roll no (1-12): make flashcards of input and output devices**

**Roll no (13-24): make a wall hanging on hardware devices**

**Roll no (25-36): make a model of desktop screen**

**Roll no (39-48): make a chart on do's and don'ts of computer lab**